

**MATHEMATICS**  
**REVISION WORKSHEET - II (2018-19)**

**Class – II**

**Date:** \_\_\_\_\_

**Name** \_\_\_\_\_

**Roll No.** \_\_\_\_\_

**Sec.** \_\_\_\_\_

**Q1. Write the number names for –**

a) 903 - \_\_\_\_\_

b) 844 - \_\_\_\_\_

c) 1000 - \_\_\_\_\_

**Q2. Write the numeral for-**

a) Six hundred nine- \_\_\_\_\_

b) Four hundred eighty six- \_\_\_\_\_

c) Seven hundred ten - \_\_\_\_\_

d) Nine hundred thirty one - \_\_\_\_\_

**Q3. Complete the counting:**

a) 457 , 458 , \_\_\_\_\_ , \_\_\_\_\_ , \_\_\_\_\_

b) 881 , 880 , \_\_\_\_\_ , \_\_\_\_\_ , \_\_\_\_\_

**Q4. a) Write in ascending order.**

456, 936, 783, 801

\_\_\_\_\_, \_\_\_\_\_, \_\_\_\_\_, \_\_\_\_\_

**b) Put > , < or = sign.**

938  875

409  567

713  712

**Q5. Fill in the blanks-**

a)  $2 \times 4 =$  \_\_\_\_\_

b)  $4 \times 7 =$  \_\_\_\_\_

c)  $4 \times 9 =$  \_\_\_\_\_

d)  $3 \times 5 =$  \_\_\_\_\_

e)  $5 \times 2 =$  \_\_\_\_\_

f)  $5 \times 8 =$  \_\_\_\_\_

g) The shape of a football is \_\_\_\_\_.

h) The shape of an eraser is \_\_\_\_\_.

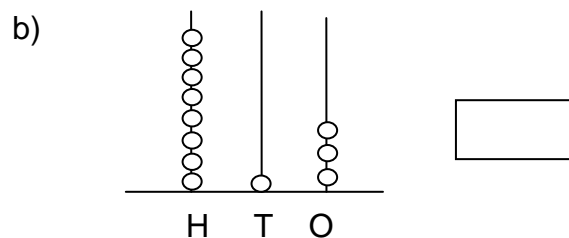
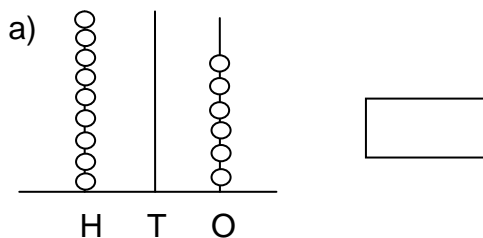
i) A rectangle has \_\_\_\_\_ sides.

j) A circle has \_\_\_\_\_ side.

k)  $709 =$  \_\_\_\_\_  $+$  \_\_\_\_\_  $+$  9

l)  $485 =$  \_\_\_\_\_  $+$  80  $+$  \_\_\_\_\_

**Q6. Write the number shown on the spike abacus:**



**Q7. Give the standard numeral-**

a)  $600 + 50 + 3 =$  \_\_\_\_\_

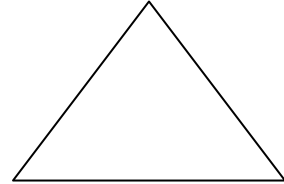

b)  $800 + 10 + 0 =$  \_\_\_\_\_

**Q8. What comes next?**

a.  $\triangle \triangle \bigcirc \bigcirc \triangle \triangle \bigcirc$  \_\_\_\_\_

b.  $\uparrow \uparrow \downarrow \downarrow \uparrow \uparrow \downarrow$  \_\_\_\_\_

**Q9. Identify the shapes -**



\_\_\_\_\_

\_\_\_\_\_

\_\_\_\_\_

**Q10. Write the place value of the underlined digit-**

a) 581- \_\_\_\_\_

b) 904- \_\_\_\_\_

**Q11. Subtract:**

a) T O

4 8

- 1 6

\_\_\_\_\_

\_\_\_\_\_

b) T O

7 4

- 2 8

\_\_\_\_\_

\_\_\_\_\_

c) T O

4 5

- 2 9

\_\_\_\_\_

\_\_\_\_\_

d) T O

7 0

- 4

\_\_\_\_\_

\_\_\_\_\_

**Q12. . Raman had 63 colours. He gave away 38 colours to his sister. How many colours are left with him?**

\_\_\_\_\_

\_\_\_\_\_

\_\_\_\_\_

\_\_\_\_\_

\_\_\_\_\_

## ENGLISH WORKHEET 6 (2018-19)

### (Has, Have, Had)

CLASS 2

Date: \_\_\_\_\_

NAME: \_\_\_\_\_

ROLL.NO

SEC: \_\_\_\_\_

### USE Of Has, HAVE, Had

- We use **Has** or **Have** when we talk about something that we possess in present.
- **Has** is used for one person, animal, place or thing.  
Eg: Anil **has** a pen.  
Vineeta **has** two pencils.
- **Have** is used for more than one, however we always use Have with I and You.  
Eg: They **have** many hens.  
I **have** two birds.
- We use **Had** when we talk about something that we possessed in the past. Eg: Yesterday, I **had** fever.  
Last Saturday, we **had** a basketball match.

Q1. Fill in the blanks with have or has:

1. I \_\_\_\_\_ a doll.
2. Raj \_\_\_\_\_ a teddy bear.
3. She \_\_\_\_\_ a pet rabbit.
4. They \_\_\_\_\_ a blue car.
5. Those butterflies \_\_\_\_\_ pretty blue wings.
6. Amita \_\_\_\_\_ two brothers.
7. Lions \_\_\_\_\_ long manes.
8. Winny \_\_\_\_\_ many cousins.
9. I \_\_\_\_\_ two sisters.

Q2. Choose the correct option:

- (a) Dimpi (has / have) a new video game.
- (b) Last Monday, Ashi (have / had) an English test.
- (c) A river (has / have) two banks.
- (d) You (have / has) very nice handwriting.
- (e) Komal (has / had) a sore throat last week.
- (f) I (has / have) many friends.
- (g) Our school (had / have) a painting competition last week.
- (h) Suhani (has / have) beautiful teeth.

Q3. Fill in the blanks with has, have or had:

- (i) Komal \_\_\_\_\_ a sore throat last week.
- (ii) Vanya \_\_\_\_\_ curly hair.
- (iii) We \_\_\_\_\_ some very nice food and desserts at Manu's house last night.
- (iv) Our new neighbours \_\_\_\_\_ three children.
- (v) We went to the zoo yesterday. We \_\_\_\_\_ a lot of fun.
- (vi) You \_\_\_\_\_ very nice handwriting.
- (vii) I \_\_\_\_\_ a beautiful umbrella.

Class II

Date: \_\_\_\_\_

Name \_\_\_\_\_ Roll No. \_\_\_\_\_ Sec \_\_\_\_\_

**Simple Present Tense**

The **Simple Present Tense** is used to show actions that are repeated and true for all times. For words in the Present Tense **we add -s or -es**

**For Example:** 1) A pilot flies aeroplane.

2) Wood floats on water.

In **Simple Present Tense**, verb takes 2 forms depending upon the **Subject**.

Subject	Verb Form
1. I, You , We , They	Root form of verb. Eg – eat , walk , go , do
2. He , She , It	Root form + s/es Eg – eats , walks , goes , does

Q1. Underline the **Simple Present Tense** in the following sentences.

1. The potter makes pots.

2 Ravi loves to eat sweets.

3. A lion roars loudly.

4. A river flows down the hill.

5. The sun shines brightly.

Q2. Circle the correct words to complete these sentences.

1. Neelam **walk / walks** to the school every morning.

2. My dog always **bark / barks** at the postman.

3. Do you **like / likes** chocolate milk?

4. Robert **do / does** not want to play cricket..

5. The bus **leave / leaves** at 8 a.m..

6. Janet **clean / cleans** her desk every Sunday.

## COMPREHENSION PASSAGE

**Comprehension passage** is an unseen passage that helps in developing the reading and thinking skills of the learner as she has to think and answer the questions that follow the passage.

### THE ELEPHANT

#### **I. Read the passage carefully.**

The elephant lives in Africa. The elephant is big and grey. It has four legs and big feet. It has big ears and two tusks. The elephant's nose is called a trunk. The elephant uses its trunk to pick up food. Its big ears help to keep it cool.

Q1. Tick( ) the correct options.

1. Where does the elephant live?

America       Europe       Africa

2. How are the elephant's feet?

small       big       thin

Q2. Write True or False

(a) The elephant's nose is called mane. \_\_\_\_\_

(b) The elephant has two tusks. \_\_\_\_\_

#### **II. Read the passage carefully.**

### THE DOLL

Bina has a doll. Father gave the doll to Bina on her birthday. The doll's name is Tini. It has black hair. Its face is round. Tini has a yellow dress. Its shoes are brown. Bina plays with Tini every day.

Q1. Fill in the blanks

(a) The doll's name is \_\_\_\_\_.

(b) Tini has a \_\_\_\_\_ face.

(c) Father gifted Baby the doll on her \_\_\_\_\_.

**ENGLISH WORKHEET 8 (2018-19)**

**(PICTURE COMPOSITION)**

**CLASS 2**

**Date:** \_\_\_\_\_

**NAME:** \_\_\_\_\_ **ROLL.NO** \_\_\_\_\_ **SEC:** \_\_\_\_\_

**Q1. Look at the picture carefully and complete the following paragraph using the words given in the help box:**

Horses,	village,	cat,	dogs,	milk,	kittens,
hay,	pond,	grandmother,	cow,	cock,	hen

In June, we went to a \_\_\_\_\_




where my




lives. She has a farm. On her farm there

are many animals. There are two \_\_\_\_\_



, a



with its \_\_\_\_\_



, three \_\_\_\_\_



, one \_\_\_\_\_




as well

as a \_\_\_\_\_




and a \_\_\_\_\_



. Every

morning she feeds her animals with \_\_\_\_\_



or

\_\_\_\_\_



. They drink water from a \_\_\_\_\_



on the

farm.

**Q2. Look at the pictures and complete the sentences:**

dots, farmers, children, Ladybug Beetle,  
insects, books

The \_\_\_\_\_  is a very famous insect.


This is because they are the favourite of \_\_\_\_\_



and adults. They have been mentioned in many \_\_\_\_\_



and are also considered lucky. They have short legs and are brightly coloured


with black \_\_\_\_\_ 

They like to eat \_\_\_\_\_



*Aphids.*

They help \_\_\_\_\_



in protecting their crops.

That is why they are liked by farmers too.



**ENGLISH**  
**REVISION WORKSHEET (P.A.-2)**  
**(2018-19)**

**Class – II**

Date: \_\_\_\_\_

Name \_\_\_\_\_ Roll No. \_\_\_\_\_ Sec. \_\_\_\_\_

**Q1.** Read the passage carefully.

Rabbits are fast animals. They have strong back legs that help them to jump and run fast. They have a short, fluffy tail which is called a Bob. Rabbits have good hearing. They have long ears which help them hear well. Rabbit is one of the most popular pet, after dogs and cats. A mother rabbit takes care of her babies in a nest. Rabbits are plant eaters. They like to eat leaves, vegetables and carrots.

1. Tick the correct answers:-

i) The tail of a rabbit is called a

- a) cob                                      b) bob

ii) Rabbits have good \_\_\_\_\_.

- a) hearing                      b) smelling

iii) A mother rabbits takes care of her babies in a

- a) house                      b) nest

2. State whether True or False:-

i) Rabbits are plant eater. \_\_\_\_\_

ii) Rabbit is not a pet animal. \_\_\_\_\_

**Q2.** Fill in the blanks with Verbs:

1. Mona \_\_\_\_\_ with her doll.

2. The dog \_\_\_\_\_ at the stranger.

3. The painter \_\_\_\_\_ the wall.

**Q3.** Complete the sentences using is, are or am:-

1. Arpita \_\_\_ a doctor.

2. Jane and Julie \_\_\_ friends.

3. I \_\_\_ riding a bicycle.

**Q4.** Circle the correct words to complete these sentences:-

1. We play/plays in the garden.
2. Riya go/goes to school.
3. The kites flies/fly in the sky.
4. He cuts/cut a big cake.

**Q5.** Fill in the blanks with has, have or had:

1. You \_\_\_\_\_ an umbrella.
2. A week \_\_\_\_\_ seven days.
3. They \_\_\_\_\_ many storybooks last month.
4. Jiya \_\_\_\_\_ dark curly hair.

**Q6.** Make sentences:

1. palace-

---

---

2. crawl-

---

---

**Q7.** Answer the following questions:

1. What fell out of the bowl?

---

---

---

---

2. Why was Ping happy to get the flower seed?

---

---

---


---


**Q8.** Fill in the blanks:-


1. Chikki pushed the pea into the \_\_\_\_\_.
2. At the end of the year, Ping's pot was \_\_\_\_\_.



Q9. Look at the picture carefully and complete the following paragraph using the words given in the help box:-

Peacock, feathers, dances, rainy, crown

The  is one of the most beautiful Indian birds. It has a

 on its head. It has a dark blue body with a long tail

made of green, blue and golden . In the \_\_\_\_\_

 season, it spreads out its feathers and .

Peacock is the National bird of India.

Revision Worksheet (L-7,9,10,11)

Subject: E.V.S (2018-19)

Class II

Date: \_\_\_\_\_

Name: \_\_\_\_\_

Sec: \_\_\_\_\_

Roll no: \_\_\_\_\_

**Q1. Multiple choice questions:**

1. We should never play with \_\_\_\_\_.

- a) football                      b) toys                      c) fire                      d) doll

2. A carpenter makes \_\_\_\_\_.

- a) furniture                      b) shoes                      c) paints                      d) clips

3. We buy milk and cheese from a \_\_\_\_\_.

- a) hospital                      b) green grocer                      c) milk booth                      d) chemist

4. Gandhi Jayanti is celebrated on \_\_\_\_\_.

- a) 26 January                      b) 14 August                      c) 2 October                      d) 15 August

5. A potter works with \_\_\_\_\_.

- a) Cotton                      b) wood                      c) clay                      d) metal

**Q 2. Fill in the blanks:**

1. A \_\_\_\_\_ sells us cereals, pulses, spices etc.

2. We must never \_\_\_\_\_ after a moving bus.

3. The \_\_\_\_\_ and \_\_\_\_\_ take care of us in the hospital.

4. On \_\_\_\_\_ we celebrate the birthday of Jesus Christ.

5. We celebrate Independence Day on \_\_\_\_\_.

**Q3. Write two examples of:**

1. People who sell us things \_\_\_\_\_, \_\_\_\_\_
2. Festivals we celebrate with our neighbours \_\_\_\_\_, \_\_\_\_\_

**Q4 . Answer the following questions.**

Q1. What do you mean by occupation?

Ans: \_\_\_\_\_  
\_\_\_\_\_

Q2. Why safety habits are important to follow?

Ans: \_\_\_\_\_  
\_\_\_\_\_

**Q5. Write emergency contact numbers of following:**

- a) Police \_\_\_\_\_
- b) Ambulance \_\_\_\_\_
- c) Fire station \_\_\_\_\_
- d) Women helpline \_\_\_\_\_

**Q6. Match the following:**

- |            |            |
|------------|------------|
| 1. Postman | a) Paint   |
| 2. Chef    | b) Letter  |
| 3. Painter | c) Cooking |

**Q7. True or False:**

- a) We buy stamps from the post office. \_\_\_\_\_
- b) Holi is the festivals of colours . \_\_\_\_\_
- c) Work is not important in our lives. \_\_\_\_\_

# अर्द्धवार्षिक परीक्षा-II पर आधारित हिन्दी अभ्यास पृष्ठ (2018-19 )

## विषय- हिन्दी

(पाठ- 3, 5, 8 निकुंज पाठमाला)

व्याकरण- विलोम, संज्ञा, अनुच्छेद लेखन

कक्षा - दूसरी

नाम - \_\_\_\_\_

विभाग : \_\_\_\_\_

अनुक्रमांक : \_\_\_\_\_

प्रश्न-1. प्रस्तुत कवितांश को पढ़कर पूछे गए प्रश्नों के उत्तर दो-

ठीक समय पर नित उठ जाओ।

ठीक समय पर चलो नहाओ।

ठीक समय पर खाना खाओ।

ठीक समय पर पढ़ने जाओ।

क) आपको कब उठना चाहिए?

अ) ठीक समय पर

ब) जब मन हो

स) जब माँ कहे

ख) ठीक समय पर खाना न खाने से क्या होगा?

अ) तबीयत खराब होगी

ब) खाने का मन नहीं करेगा

स) दोनों ही बातें

ग) 'नित' शब्द का अर्थ लिखो।

\_\_\_\_\_

प्रश्न-2. संज्ञा शब्दों को रेखांकित करें-

क) दिल्ली, भारत की राजधानी है।

ख) गंगा, हिमालय से निकलती है।

प्रश्न-3. निम्न प्रश्नों के उत्तर दो।

क) लोमड़ी कहाँ से जा रही थी?

उत्तर-

\_\_\_\_\_

ख) सुनिधि किसके साथ बाज़ार गई?

उत्तर-

\_\_\_\_\_

ग) यदि आप अपनी माता जी के साथ बाज़ार जाएँ तो आप किन- किन बातों का ध्यान रखेंगे? (मूल्याधारित प्रश्न)

उत्तर-

---

---

प्रश्न-4. शब्दों के अर्थ लिखो-

क) हमला - \_\_\_\_\_

ख) रक्षा - \_\_\_\_\_

ग) खूँखार - \_\_\_\_\_

घ) क्षमा करना - \_\_\_\_\_

प्रश्न-5. विलोम शब्द लिखिए-

क) दिन × \_\_\_\_\_

ख) खुशबू × \_\_\_\_\_

ग) पास × \_\_\_\_\_

घ) चतुर × \_\_\_\_\_

ङ) मज़बूत × \_\_\_\_\_

च) नया × \_\_\_\_\_

प्रश्न-6. सही विकल्प पर (√) का निशान लगाओ-

क) मुर्गे ने लोमड़ी को दूर से किसके आने की बात बताई?

क) शेर के

ख) हाथी के

ग) शिकारी कुत्तों के

ख) “मैं अब कभी आपका हाथ छुड़ाकर नहीं भागूँगी”- किसने कहा?

क) माँ ने

ख) सुनिधि ने

ग) माँ की सहेली ने

प्रश्न-7. एक से अनेक बनाओ।

क) गधा - \_\_\_\_\_

ख) लोमड़ी - \_\_\_\_\_

ग) मुर्गा - \_\_\_\_\_

घ) गिलहरी - \_\_\_\_\_





**Revision Worksheet**  
**Computer Science**  
**Based on the syllabus of PA-II**

**Ch:6,7,8**

**Class II**  
**Name:** \_\_\_\_\_

**Sec** \_\_\_\_\_

**Date:** \_\_\_\_\_  
**Roll No.** \_\_\_\_\_

**Q1. Multiple choice Questions:**

1. A Mouse is an \_\_\_\_\_ device.

- a. Input                       b. output                       c. processing

2. Where do we attach the wire of a Mouse?

- a. CPU                       b. Monitor                       c. Printer

3. Pressing the mouse button once is called \_\_\_\_\_ .

- a. Double clicking                       b. Clicking                       c. Dragging

4. Which is not the function of mouse?

- a. Clicking                       b. Typing                       c. Dragging

5. Which tool is used to draw a circle?

- a.                        b.                        c. both a & b


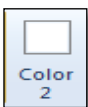
6. Identify the tool which is used to draw Polygon .

- a.                        b.                        c. 

7. What do we call the bar that displays the program name and file name?

- a. Title bar                       b. Scroll bar                       c. Status bar

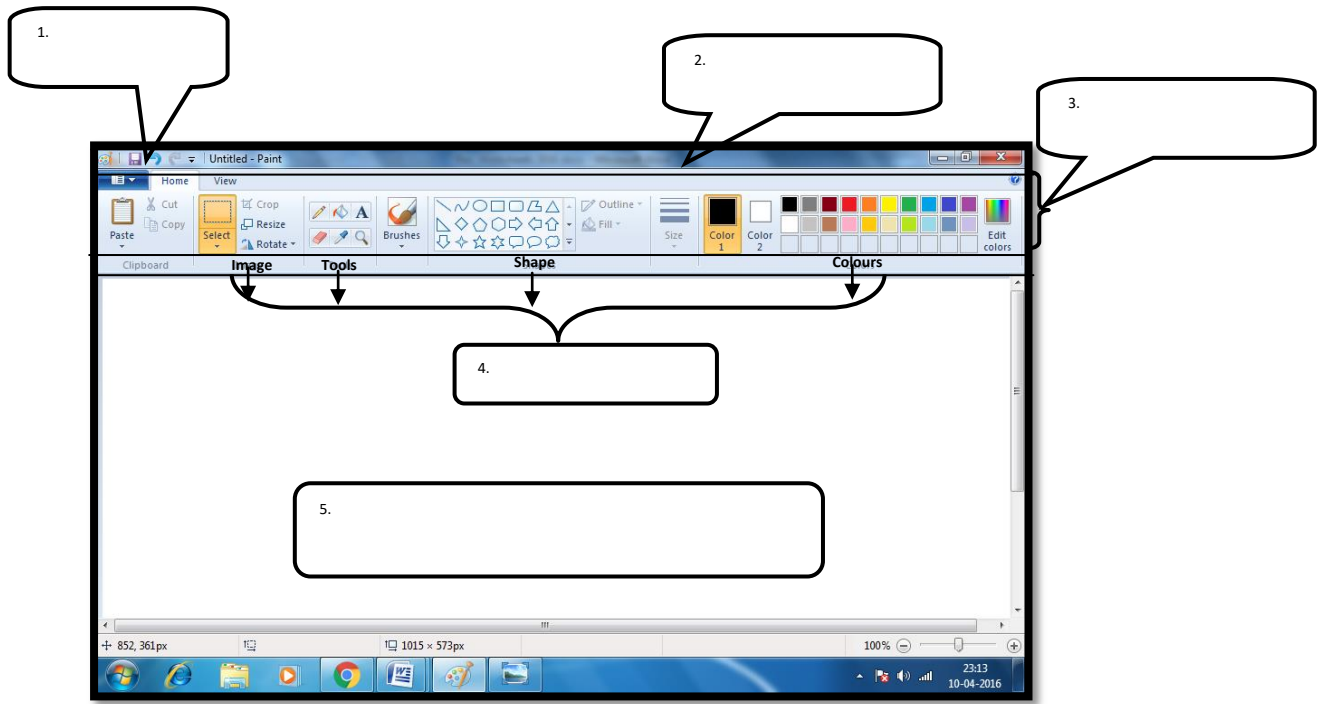
8. Which button shows the backgroundcolour?

- a.                        b.                        c. both a & b

9. Identify the tool which is used to create spray effects in the drawing.

- a.                        b.                        c) 

**Q2. Label the MS Paint Window.**



**Q3. Write the functions:**

1. To select an item

2. To open a program

3. To move an item

4. To show the shortcut menu of commands.

**Q4. Name the types of mouse.**

---

---

Subject: Value Education  
WORKSHEET (2018-2019)  
L- 5, 7 and 15

Class: II

Name: \_\_\_\_\_ Sec: \_\_\_\_\_ Roll No \_\_\_\_\_ Date \_\_\_\_\_

Helping others is the quality that everyone should possess. We should help others with their work and avoid doing things that can make extra work for others. There are several ways to help people who are in need of it. It costs nothing but the person who receives it, knows its value. We should always be ready to help others.

Q.1 Fill in the blanks.

- a) I \_\_\_\_\_ my mother in work.
- b) I help to \_\_\_\_\_ my bed.
- c) Always keep your room \_\_\_\_\_
- d) We should do our work on our \_\_\_\_\_.
- e) We must maintain \_\_\_\_\_ when someone is praying.
- f) While moving in a bus we should talk \_\_\_\_\_.
- g) We should be \_\_\_\_\_ when the teacher is teaching.

Q.2 How can you help your mother at home?

---

---

---

Q.3 Circle the pictures that shows the act of kindness.



Q.4 Give reasons why you should be silent in:







a) a Library

---

b) a Classroom

---

Q.5 There are some places mentioned in the stars. Colour the stars 'Yellow' for places where we should maintain silence and 'Green' where we can talk softly.



Q.6 Write two things in which you need help from your elders. Also mention whose help do you take in completing those tasks.

---

---